

## English Test

1. When you see a flashing red light, you should:
  1. Not enter the road ahead.
  2. Reduce your speed. Then proceed with caution when it is safe to do so.
  3. Stop, then proceed only when it is safe to do so.
  4. Proceed with caution.
  
2. Where is it permitted to make a U-turn?
  1. At a pedestrian crossing.
  2. At an intersection.
  3. Traffic lanes that are divided by a broken line.
  4. On a bridge.
  
3. Which of the following statements are true?
  1. You may display license plates that you have made yourself.
  2. You may allow unlicensed drivers to use your vehicle.
  3. You may allow someone else to use your driver license.
  4. It is prohibited to drive a vehicle for which the annual tax has not been paid.
  
4. This sign means:
  1. No left turn.
  2. You may turn left.
  3. Pass the obstacle ahead on the left.
  4. Left curve ahead.
  
5. When is it prohibited to pass?
  1. Where the road is divided by a broken line.
  2. Within 30 meters of a crossroad.
  3. When you are passing on the left on a road with two or more lanes moving in the same direction.
  4. When you are passing on the left and the vehicle being passed is waiting to turn right.



6. This sign means:

1. Single-lane traffic.
2. Do not pass.
3. No U-turn.
4. Do not drive on the right.

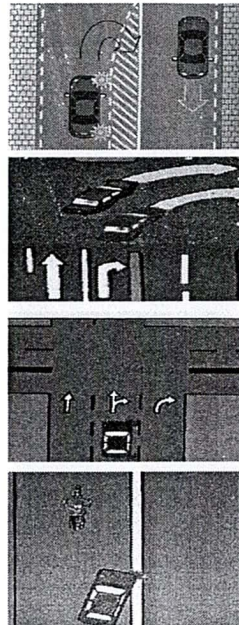


7. This sign means:

1. No parking, except for loading and unloading passengers.
2. You may park while waiting for passengers.
3. Bus lane.
4. Bus parking only.

8. Which of the pictures below illustrates a proper turn?

1. See the picture on the right hand.
2. See the picture on the right hand.
3. See the picture on the right hand.
4. See the picture on the right hand.



9. Which of the following statements is true?

1. When making a turn, you should give a signal at least 60 meters before turning.
2. When making a right turn, you should extend your right arm from the vehicle at shoulder-level and raise and lower.
3. Slow-moving vehicles must use the left lane.
4. Within the Bangkok Metropolitan Area, The maximum speed limit is 60 kilometers per hour.

10. When you see a flashing red light, you should:

1. Reduce your speed. Then proceed with caution when it is safe to do so.
2. Proceed with caution.
3. Stop, then proceed only when it is safe to do so.
4. Not enter the road ahead.

11. This sign means:

1. Do not move to the right.
2. Right curve.
3. Merge ahead.
4. No right turn.



12. When you see this sign, you should:

1. Reduce your speed and proceed across the bridge.
  2. Reduce your speed and use the detour, the bridge is closed.
  3. Use low gear, High bridge ahead.
  4. Reduce your speed and check for on coming traffic before crossing.
- One-lane bridge ahead.



13. The sign means:

1. Stop. Give right of way to smaller vehicles.
2. Stop. Give right of way to vehicles moving in the opposite direction.
3. Stop. Give right of way to larger vehicles.
4. Reduce your speed and allow other vehicles to pass before proceeding.



14. This sign means:

1. The minimum speed limit is 30 kilometers per hour.
2. Vehicles weighing more than 30 tons are prohibited.
3. Vehicles carrying loads weighing more than 30 tons are prohibited.
4. The maximum speed limit is 30 kilometers per hour.





15. When you see this sign, you should:

1. No left turn
2. Do not go straight ahead.
3. Reduce your speed. The road ahead curves to the right. Drive carefully.
4. Reduce your speed, then carefully turn left.



16. How far back from the vehicle in front of you should you drive?

1. Far enough to allow you to stop safely in an emergency.
2. 50 meters.
3. 18 meters.
4. 30 meters.


17. In the situation pictured below, you should:

1. Move to the right and proceed around the obstruction without delay.
2. Stop and wait for other car to pass.
3. Put on your right turn signal and wait for car A to pass before proceeding.
4. Put on your right turn signal and pass to the left without delay.



18. Which of these pictures is correct?


1. See the picture on the right hand.
2. See the picture on the right hand.
3. See the picture on the right hand.
4. See the picture on the right hand.





19. This sign means:

1. No stopping within the cross-hatched lines.
2. No passing within the cross-hatched lines.
3. No vehicles may pass the cross-hatched lines.
4. Temporary stopping for loading and unloading within the cross-hatched lines.



20. Drivers are forbidden to make a U-turn:

1. When another vehicle is following at a distance of less than 150 meters.
2. In the spaces between traffic islands.
3. Within 150 meters of a bridge.
4. Within a safety zone.

21. Which of the following statements is true?

1. You may allow someone else to use your driver license.
2. It is prohibited to drive a vehicle for which the annual tax has not been paid.
3. You may allow unlicensed drivers to use your vehicle.
4. You may display license plates that you have made yourself.

22. Which of these statements is true?

1. You may display license plates you have made yourself
2. You do not need to carry your driver license when driving.
3. You may allow someone who does not have a driver license to operate your vehicle.
4. You may not drive a vehicle for which the annual tax has not been paid.

23. If you begin to feel drowsy while driving, you should:

1. Drink coffee.
2. Reduce your speed.
3. Stop your vehicle and rest before proceeding.
4. Take an amphetamine pill.

24. Which of the following statements is true?

1. You may transport loads that extend no more than 2.5 meters from the rear of your vehicle.
2. You may transport loads no more than 3 meters high.
3. You may transport loads that extend one meter out from each side of your vehicle.
4. You may transport loads that extend no more than 2.5 meter from the front of your vehicle.

25. When is it prohibited for a motorist to:


1. When he/she has a cold or flu.
2. After taking medicine for diarrhea.
3. When there is insufficient light.
4. Immediately after consuming alcohol or any other intoxicants.

26. Where is it prohibited to make a U-turn?

1. Where another vehicle is following at a distance of less than 120 meters.
2. In front of a hospital.
3. Within 150 meters of a bridge.
4. At an intersection.

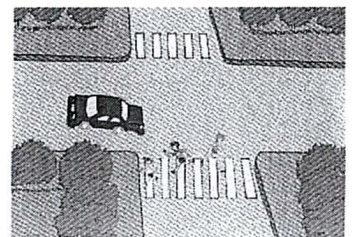
27. The dividing lines in the middle of the road pictured on the left indicate:

1. The driver of the car in the picture may not pull into the right lane to overtake another vehicle.
2. The driver of the car in the picture may turn right.
3. The driver of the car in the picture may make a U-turn.
4. Move your car off the road and turn on emergency flashes.



28. The driver intending to make a right turn in the picture on the left should:

1. Slow down before turn right, then stop to allow the pedestrians to cross the street before completing the turn.
2. Turn immediately without stopping.
3. Stop to allow the pedestrians in the crosswalk to reach the other side of the street before turning right.
4. Slow Down.



29. Which of the following vehicles is it prohibited to use on a public road?

1. A tank used in warfare.
2. A vehicle displaying dealer's plates.
3. A vehicle with a horn louder than 70-decibel.
4. A vehicle without a front windshield.

30. Drivers are forbidden to make a U-turn:


1. Within a safety zone.
2. When another vehicle is following at a distance of less than 150 meters.
3. Within 150 meters of a bridge.
4. In the spaces between traffic islands.

31. Which of the following vehicles is it prohibited to use on a public road?

1. A vehicle without a front windshield.
2. A vehicle displaying dealer's plates.
3. A tank used in warfare.
4. A vehicle with a horn louder than 70-decibels.

32. Which of the pictures below illustrates proper parking?

1. See the picture on the right hand.
2. See the picture on the right hand.
3. See the picture on the right hand.
4. See the picture on the right hand.



33. Drivers are forbidden to:

1. Pass within 50 meters of an intersection.
2. Park on the right-hand side of a one-way street.
3. Park directly beneath a pedestrian bridge.
4. Make a U-turn in an intersection.


34. Which of the following statements is true?

1. You may transport loads that extend one meter out from each side of your vehicle.
2. You may transport loads that extend no more than 2.5 meters from the rear of your vehicle.
3. You may transport loads no more than 4 meters high.
4. You may transport loads that extend no more than 2.5 meters from the front of your vehicle.




35. Which of the vehicles in the picture on the right has the right of way?

1. The car moving at a higher rate of speed.
2. Car B.
3. Car A.
4. The car moving at a lower rate of speed.




36. The driver in car A should:

1. Slow Down.
2. Proceed immediately without stopping or slowing.
3. Stop behind the line, and wait to make sure there is no cross traffic before proceeding.
4. Reduce his/her speed and proceed with caution.



37. This sign on the road surface indicates:

1. No vehicles may cross the cross-hatched lines.
2. Absolutely no stopping in this area.
3. The entrance/exit to a building.
4. No passing within the cross-hatched lines.

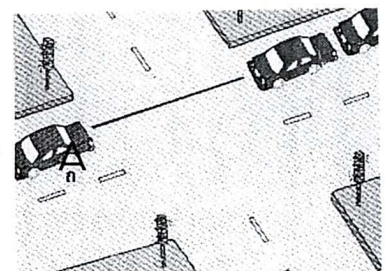


38. If you begin to feel drowsy while driving, you should:

1. Drink coffee.
2. Reduce your speed.
3. Take an amphetamine pill.
4. Stop your vehicle and rest before proceeding.

39. When the light turns green, the driver of Car A must ;

1. Immediately pull up behind the vehicle in front.
2. Reduce your speed to allow other vehicle to pass.
3. Turn either left or right since it is not possible to go straight ahead.
4. Wait for the driver of the vehicle in front to move forward so that Car A will not block the intersection.



40. If you experience a breakdown, you should:

1. Leave your car at the spot where it broke down and call a mechanic immediately.
2. Leave your car at the spot where it broke down and arrange to have it towed immediately.
3. Leave your car at the spot where it broke down and arrange for repairs later.
4. Pull your vehicle on to the shoulder and turn on your emergency flashers.

41. As a driver, you must not:

1. Make a turn into the bus lane.
2. Carry loads that obstruct your vision behind and to the sides of your vehicle.
3. Enter halfway into the next lane when an obstruction blocks the left side of the lane you are driving in.
4. Drive a racing car on a public road with the permission of the relevant traffic authorities.

42. This sign means:

1. No U-turn.
2. Use the right lane.
3. One-way traffic.
4. No cross traffic.



43. When descending a steep grade or hill, you should:


1. Use a low gear.
2. Keep your foot on the brake.
3. Turn off your engine.
4. Shift to neutral gear.

44. Which of the follow is prohibited?

1. To drive immediately after consuming alcohol.
2. To drive a racing car on a public road with the permission of the relevant traffic authorities.
3. To drive halfway into the next lane on the right when there is an obstruction on the left.
4. To drive on the right on a one-way road.

45. This sign means:

1. No parking.
2. Yield to other traffic.
3. Do not enter.
4. One-way traffic ahead.



46. When is it prohibited for a motorist to drive?

1. After taking medicine for diarrhea.
2. Immediately after consuming alcohol or any other intoxicant.
3. When he/she has a cold or flu.
4. When there is insufficient light.

47. This sign means:

1. No U-turn.
2. Single-lane traffic.
3. Do not drive on the right.
4. Do not pass.



48. This sign means:

1. No right turn.
2. Sharp curve ahead.
3. Right turn permitted.
4. Left turn permitted.



49. Drivers are prohibited to:

1. Park on the right-hand side of a one-way street.
2. Drift into the next lane when there is an obstruction in their own lane.
3. Drive a racing car when permission has been granted by the relevant traffic authorities.
4. Drive immediately after having consumed alcohol.

50. When you see this sign, you should:

1. Reduce your speed. Stop if pedestrians are crossing in front of you.
2. Proceed as usual.
3. Drive carefully, You are in a school zone.
4. Proceed if there are no pedestrians crossing.





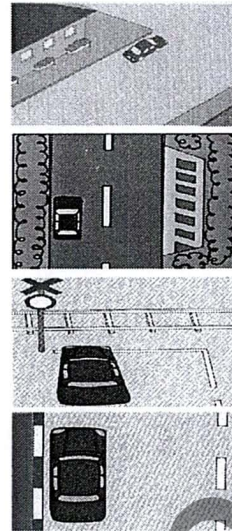
51. Which of these pictures is correct?

1. See the picture on the right hand.

2. See the picture on the right hand.

3. See the picture on the right hand.

4. See the picture on the right hand.



52. It is prohibited to:

1. Drive when there is insufficient light.

2. Pass on the left on a road with two or more lanes of traffic moving in the same direction.

3. Drive a racing car on a public road with the permission of the relevant traffic authorities.

4. Operate a motor vehicle if you feel the onset of a heart attack.

53. Which type of vehicle is it prohibited to use on a public road?

1. A vehicle with broken brake lights.

2. A tank used in warfare.

3. A vehicle whose engine is louder than 80 decibels.

4. A tractor with rubber tires.

54. In which of the following circumstances is it forbidden to pass?

1. To pass on the left when the vehicle in front of you is turning right.

2. To use the bus lane as a passing lane.

3. In front of a hospital.

4. Where there is a flood.

55. Drives are forbidden to:

1. Park directly beneath a pedestrian bridge.

2. Make a U-turn at an intersection.

3. Pass within 50 meters of an intersection.

4. Park on the right-hand side of a one-way street.

56. When you see this sign, you should



1. Reduce your speed and watch for barriers.
2. Reduce your speed. Look to the left and right for approaching trains.
3. Exercise caution. If a train is approaching, stop your vehicle at least 5 meters from the track.
4. Both 2 and 3.

57. When you see this sign, you should



1. Reduce your speed. Shift to low gear and watch for oncoming traffic.
2. Speed up and pass with caution.
3. Pass quickly.
4. All of the above.

58. You should not drive :

1. When you have a severe cold or flu.
2. After consuming alcohol or any other intoxicant.
3. After taking medicine for diarrhea.
4. All of the above.

59. Which type of vehicle is prohibited to drive on a public roadway ?

1. A vehicle with broken taillights.
2. A vehicle with an 80-decibel engine.
3. A tank used in warfare.
4. A tractor with rubber tires.

60. It is prohibited to park:

1. Within 3 meters of a fire hydrant.
2. within 5 meters of a traffic light.
3. Within 4 meters of a railroad crossing.
4. All of the above.


61. When you see this sign. You should

1. May not go straight.
2. Should reduce your speed and carefully enter the curve to the right
3. Should turn left.
4. Should reduce your speed and turn right with caution




62. Which of the pictures below shows proper stopping?

1. Car B
2. Car A
3. Stop and slow down.
4. The car traveling.



63. In the picture, the driver of Car A should

1. Stop and wait for other car to pass.
2. Reduce his/her speed to allow the cars on the left and right to pass before proceeding.
3. Stop to allow the car on the left to pass before proceeding.
4. Stop to allow the car on the right to pass before proceeding.



64. This sign means:

1. Do not pass.
2. Move to the left.
3. Single-lane traffic.
4. One-way traffic.



64. When you see sing reading "left Turn on Red," you should

1. Stop. Wait for a green light before turning left.
2. Turn left without stopping.
3. Stop. Wait for pedestrians and other vehicles from the right to pass in front of you before turning left.
4. Lower your speed and turn left without delay.



66. This sign mean

1. Stop. Watch for other vehicles in the intersection before proceeding.
2. Temporary stopping for loading and unloading.
3. Reduce your speed before proceeding.
4. Parking allowed.



67. You must not park

1. On the right-hand side of a two-way street.
2. In front of a school.
3. In front of a police station.
4. On a gradient

68. In which of the following circumstances is it forbidden to pass?

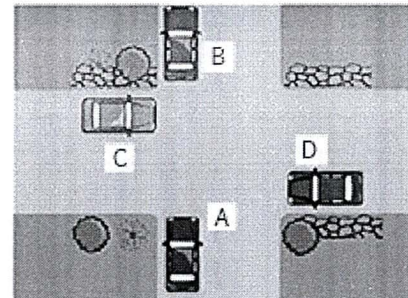
1. To use the bus lane as a passing lane.
2. To pass on the left when the vehicle in front of you is turning right.
3. In front of a hospital.
4. When there is a flood.

69. Which of the following is NOT permitted?

1. Driving when your ability to operate a vehicle is impaired.
2. Driving in dim or dark conditions with the headlights on, giving visibility of 150 meters.
3. Driving a racing car on a public road with the permission of the relevant traffic authorities.
4. Passing on the left when the vehicle you are passing is waiting to make a right turn.

70. The driver of Car A should.

1. Stop to allow Car B to pass before proceeding.
2. Slow Down.
3. Stop just behind Car C.
4. Pull up beside Car C.



71. You are required to turn on your headlights:


1. When it rains and When seeking to overtake other vehicles in an emergency
2. When heavy fog restricts visibility to less than 150 meters.
3. Indicating to other drivers not to pass.
4. When you intend to make a right turn.

72. Which of these vehicles is it prohibited to use on a public road?

1. A vehicle whose headlights do not function.
2. A tank used in warfare.
3. A tractor with rubber tires.
4. A vehicle whose engine is louder than 75 decibels.


73. When you see this sign, you should

1. Reduce your speed and watch for oncoming traffic.
2. Stop and allow oncoming traffic to pass before proceeding.
3. Proceed with caution
4. Do not enter the road ahead



74. Which of the pictures below illustrates proper parking?

1. See the picture.
2. See the picture.
3. See the picture.
4. See the picture.



75. In the picture on the right, the driver of Car D wishes to go straight. To do so, he/she should:

1. Stop and wait for Car A to pass before proceeding.
2. Stop and wait for Car C to turn left before proceeding.
3. Slow down.
4. Stop and wait for Car B to turn right before proceeding.




76. In which of the following circumstances is it forbidden to pass?

1. When there is a flood.
2. To use the bus lane as a passing lane.
3. In front of a hospital.
4. To pass on the left when the vehicle in front of you is turning right.

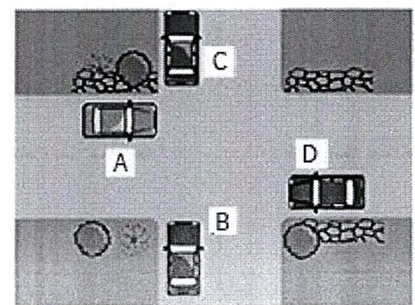
77. This sign means:

1. No left turn.
2. Keep to the right.
3. All traffic must move to the right.
4. Right turn is allowed.




78. In the picture on the right, the driver of Car A must.

1. Stop and yield the right of way to Car C.
2. Wait for the car moving at a higher rate of speed.
3. Immediately pull up behind Car B.
4. Turn either left or right since it is not allowed to go straight.



79. The driver of the vehicle in the picture:

1. Should stop or slow down.
2. May make a U-turn.
3. May not make a right turn.
4. May not pass or otherwise move into the lane on the right.





80. When you see this sign, you should.

1. Stop immediately.
2. Watch for vehicles cutting in front.
3. Reduce your speed, The road may be slippery ahead.
4. Drive carefully, Winding road ahead.



81. Where is it not permitted to make a U-turn?


1. Where another vehicle is following at a distance of less than 150 meters.
2. In the space between traffic island.
3. Within 150 meters of bridge.
4. On a bridge.

82. Where is it permitted to make a U-turn?

1. On a bridge.
2. Where traffic lanes are divided by a broken line.
3. At a pedestrian crossing.
4. At an intersection.

83. This sign means.

1. No passing within the cross-hatched lines.
2. Temporary stopping for loading and unloading within the cross-hatched lines.
3. No stopping within the cross-hatched lines.
4. No vehicles may pass the cross-hatched lines.



84. When you intend to stop or park your vehicle, you should:

1. Park in the bus lane.
2. Turn on your turn signal or your parking lights not less than 30 meters before stopping.
3. Park at a pedestrian crossing.
4. Stop on further than 50 centimeters from curb or the shoulder of the road.

85. If your car breaks down along highway, you should:

1. Open the hood and trunk of your car.
2. Turn on your emergency flashers and leave your car.
3. Leave your car.
4. Turn on your emergency flashers and place this sign in front of and behind your vehicle.

86. This sign means.

1. Parking for car only.
2. Only car may enter.
3. Cars may not enter the road ahead.
4. The road ahead is closed to all traffic.



87. Which of these statements is true about passing?

1. You may not pass within 150 meters of an intersection.
2. You may not pass when there is an obstruction in the left lane.
3. You may not pass on the left on a road with two or more lanes moving in the same direction.
4. You may not pass on a bridge.

88. This sign means:

1. Stop. Give smaller vehicles the right of way.
2. Stop to allow cross traffic on the main road to pass before proceeding
3. Reduce your speed and give other vehicles the right of way.
4. Stop. Give larger vehicles the light of way.



89. When you see an emergency vehicle approaching, you should:

1. Pull over to the left and stop.
2. Stop. Proceed immediately after the emergency vehicle has passed.
3. Slow down.
4. Stop in the bus.

90. This sign means:

1. School zone. Watch for children.
2. Pedestrian bridge ahead.
3. Pedestrian bridge ahead.
4. No outlet.




91. You may not park your car.

1. With 15 meters of a pedestrian crossing.
2. With 15 meters of a railroad crossing.
3. With 15 meters of a traffic light.
4. With 15 meters of a fire hydrant.

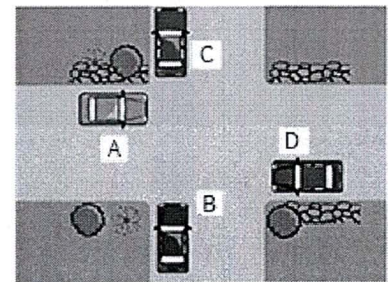
92. In the picture on the right, the driver must:

1. Reduce his/her speed and proceed through the intersection.
2. Slow down.
3. Proceed through the intersection without stopping.
4. Stop and wait for other cars to clear the intersection before proceeding.






93. In the picture on the right, the driver of Car A must:

1. Turn either left or right since it is not allowed to go straight.
2. Stop and yield the right of way to Car C.
3. Immediately pull up behind Car B.
4. The car moving at a higher rate of speed.



94. Which of the pictures below illustrates proper parking?

1. See the picture on the right hand.
2. See the picture on the right hand.
3. See the picture on the right hand.
4. See the picture on the right hand.






95. It is prohibited to:

1. Drive a racing car on a public road with the permission of the relevant traffic authorities.
2. Operate a motor vehicle if you feel the onset of a heart attack.
3. Drive when there is insufficient light.
4. Pass on the left on a road with two or more lanes of traffic moving in the same direction.

96. The driver of Car A should.

1. Stop behind the line, and wait to make sure there is no cross traffic before proceeding.
2. Slow Down.
3. Reduce his/her speed and proceed with caution.
4. Proceed immediately without stopping or slowing.



97. This sign means:

1. Road narrows ahead.
2. Parallel road ahead.
3. Tunnel ahead.
4. Bridge ahead.



98. Which of the pictures below illustrates proper parking?

1. See the picture on the right hand.
2. See the picture on the right hand.
3. See the picture on the right hand.
4. See the picture on the right hand.

